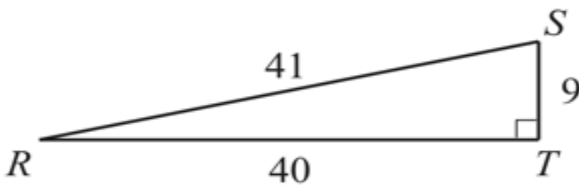
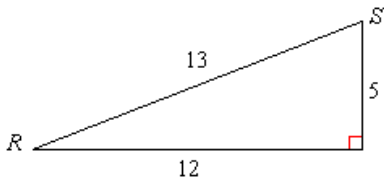


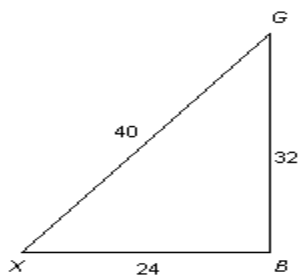
Q. Find the Sine, Cosine, and the tangent of $\angle R$ and of $\angle S$.



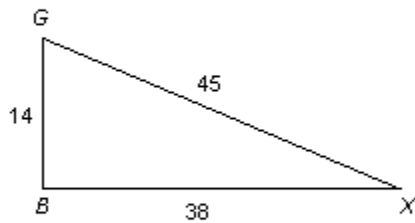
Q. Find the Sine, Cosine, and the tangent of $\angle R$ and of $\angle S$.

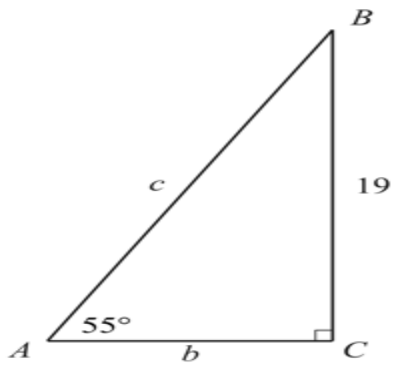


Q. Find $\sin G$, $\cos G$, and $\tan G$.

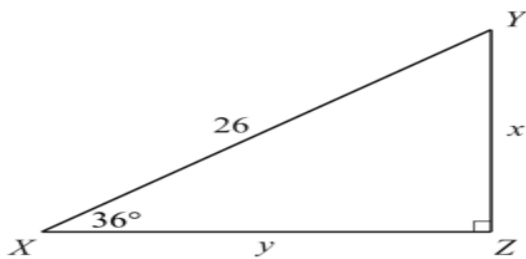


Q. Find $\sin G$, $\cos G$, and $\tan G$.

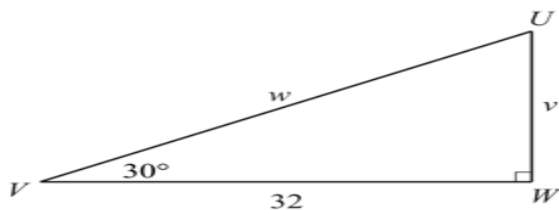




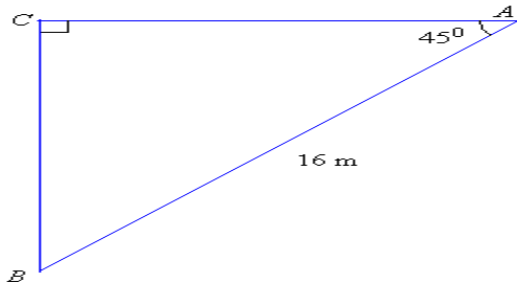
Q. Find the missing lengths in the diagram by using the Pythagorean Theorem.



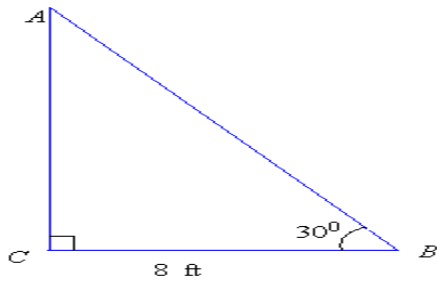
Q. Find the missing lengths in the diagram by using the Pythagorean Theorem.



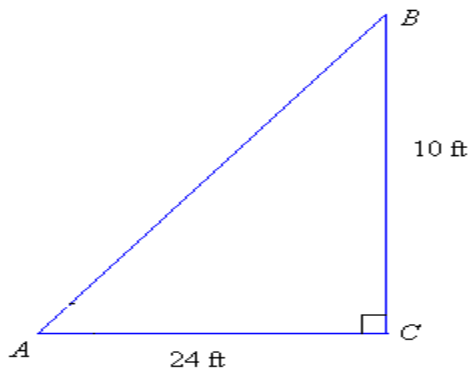
Q. Solve the triangle?



Q. Solve the triangle.



Q. Solve the triangle?



For complete SLO's Preparation email to: akber.khursheed@gmail.com

<http://tec.edu.pk>
akber.khursheed@gmail.com